


Name: \_ \_ \_ \_ \_

## Practice makes Perfect!!!!

You **MUST** read aloud **with expression** for 10 minutes.

You **MUST** read your novel silently to yourself.

Update your Home Reading Diary after you have read exactly as detailed in the example page!!!



The activities in this book are part of your homework.  
Start Monday and hand up Thursday or Friday morning.

**In Year 5 students of Trinity College must complete 40 minutes of homework every night - Monday to Thursday. (check your diary)**

## Term 4, 2017

	Teacher
Week 1	
Week 2	
Week 3	
Week 4	
Week 5	
Week 6	
Week 7	
Week 8	

Each week you will have words and additional homework. However, we expect you to also complete the following assignment over 7 weeks. You may choose to do this at home, in the Library, or in the classroom, when you have spare time. You may prefer to use a usb or email work between home and school.

### Due Date Week 8 MONDAY

#### **How is Christmas Celebrated Around the World?**

You are to prepare a powerpoint presentation which is to include:

1. Some information about the original Christmas story.
2. Christmas traditions in 3 countries of the world.
3. Information about celebrations, which 2 countries that do NOT celebrate Christmas have.

Your slides will include:

Location on a map of the country and the weather at Christmas

Christmas customs and traditions - explained or pictured (or the other celebrations for the countries which do not celebrate Christmas)

Date and time of the celebration

Decorations

Rituals / gift giving

Special food and or music

**Your presentation will have an introductory slide.**

**At least 3 slides for each country**

**A concluding slide.**

You will need to include graphics and a transition between the slides. Sound and animation are not required but may be included.

Get started early. Organise your time.

<b>Week 1</b>	<b>Week 2</b>	<b>Week 3</b>	<b>Week 4</b>	<b>Week 5</b>	<b>Week 6</b>	<b>Week 7</b>
<p>Choose countries... find which countries don't have Christmas</p> <p>Locate places on the map</p> <p>Decide if you will include links in advance and make sure you have a place to store these (a separate page for the time being, perhaps)</p>	<p>Find information about 1 countries and create slides</p> <p>Find pictures</p>	<p>Find information about 2 countries and prepare slides</p> <p>Find pictures</p>	<p>Find information about 2 slides and prepare slides</p> <p>Find pictures</p>	<p>Find information about 1 countries and create slides</p> <p>Find pictures</p>	<p>Fit the whole thing together.</p> <p>Arrange pages.</p>	<p>Include transitions and other animations or music or video that you have found.</p>
The above is an example:	Write your plan below					
<b>Week 1</b>	<b>Week 2</b>	<b>Week 3</b>	<b>Week 4</b>	<b>Week 5</b>	<b>Week 6</b>	<b>Week 7</b>

**Reading Record: Week 1 and Week 2**

<b>Week 1.</b>	<b>Title</b>	<b>Pages</b>	<b>Parent initials</b>
<b>Monday</b>			
<b>Tuesday</b>			
<b>Wednesday</b>			
<b>Thursday</b>			

<b>Week 2.</b>	<b>Title</b>	<b>Pages</b>	<b>Parent initials</b>
<b>Monday</b>			
<b>Tuesday</b>			
<b>Wednesday</b>			
<b>Thursday</b>			



**Roman Numerals** - Sometimes you will see Roman Numerals used to represent numbers. For example on clock faces, chapters in books, on old buildings, .....

Here are some Roman Numerals -

1	11	111	1V	V	V1	V11	V111	1X	X	XX	XXX
1	2	3	4	5	6	7	8	9	10	20	30

21 = XXI    12 = XII    35 = XXXV

15 = ..... ,    25 = ..... ,    16 = ..... ,    31 = ..... ,    27 =

.....

8 = ..... ,    28 = ..... ,    39 = ..... ,    23 = ..... ,    34 =

**Roman Numerals: L = 50; C = 100; D = 500 M = 1000**

**Rules: Writing the characters, I, X, C and M up to 3 times side by side means adding the number. You must not write these numbers side by side more than 3 times.**

**V, L and D cannot be repeated.**

**When a lower or number lower in value is placed to the left to one which has a larger value it is subtracted. Eg XL = 40**

**Can you work these out?**

XXIX = \_\_\_\_\_ CCCXCIX = \_\_\_\_\_ CDXLIV = \_\_\_\_\_

## Week 2

Monday: Look at each list word in the diary. Copy it here. Check. Is it correct?	Tuesday: Look at each list word in the diary. Copy it here. Check.	Wednesday: Look at each list word in the diary. Copy it here. Check.	Thursday: Look at each list word in the diary. Copy it here. Check.

Rewrite including all the punctuation marks:

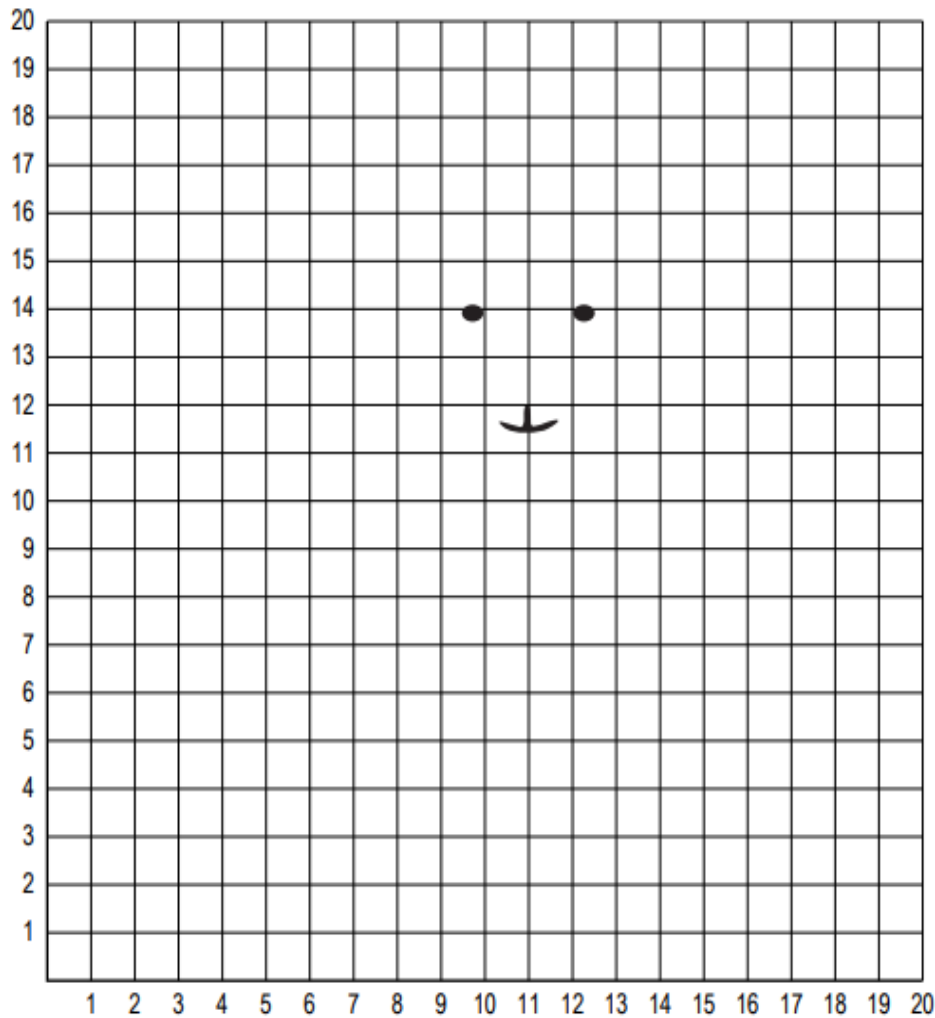
when mum goes to the shops she takes the whole family with her what a circus dont touch she screams at my little brother grab the ice-cream tom she yells at me as i am the eldest oh for goodness sake sam you should have gone to the toilet before you left home I cant stand shopping with mum


# Coordinate Picture

Name: \_\_\_\_\_ Date: \_\_\_\_\_



There is a picture hidden in this grid. Connect the points with lines to reveal it.



**Line 1:** (10,2), (12,2), (13,3), (14,5) **Line 2:** (15,1), (14,2) **Line 3:** (8,2), (9,1) **Line 4:** (6,6), (4,4), (3,4), (2,5), (1,8), (2,10), (3,11), (4,11), (6,11), (5,12), (3,12), (1,11), (0,9), (0,7), (1,4), (3,3), (5,3), (6,4) **Line 5:** (16,14), (13,13), (16,12) **Line 6:** (10,13), (11,12), (12,13) **Line 7:** (9,13), (6,13) **Line 8:** (16,13), (13,13) **Line 9:** (6,5), (7,4), (8,5), (8,8) **Line 10:** (6,14), (9,13), (6,12) **Line 11:** (10,1), (9,2) **Line 12:** (10,7), (11,6), (11,5), (10,4), (8,3), (10,2), (10,1), (8,1), (6,4), (6,9), (7,10), (9,11), (8,13), (8,18), (10,16), (12,16), (14,18), (14,13), (13,11), (14,10), (16,11), (17,13), (18,14), (19,13), (17,10), (15,9), (14,7), (15,5), (14,3), (16,2), (16,1), (14,1), (12,2) **Line 13:** (16,1), (15,2)



## Reading Record: Week 3 and Week 4

<b>Week 1.</b>	<b>Title</b>	<b>Pages</b>	<b>Parent initials</b>
<b>Monday</b>			
<b>Tuesday</b>			
<b>Wednesday</b>			
<b>Thursday</b>			

<b>Week 2.</b>	<b>Title</b>	<b>Pages</b>	<b>Parent initials</b>
<b>Monday</b>			
<b>Tuesday</b>			
<b>Wednesday</b>			
<b>Thursday</b>			

**Week 3**

Monday: Look at each list word in the diary. Copy it here. Check. Is it correct?	Tuesday: Look at each list word in the diary. Copy it here. Check.	Wednesday: Look at each list word in the diary. Copy it here. Check.	Thursday: Look at each list word in the diary. Copy it here. Check.

**General knowledge: Mark CLEARLY on the map using arrows:  
North Korea, USA, Germany, Norway, Russia, Chile, Papua New Guinea**



# NUMBER FIND

6	4	2	6	8	1	3	6	2	5
5	1	5	3	2	9	3	2	8	4
1	4	5	3	2	9	4	7	2	6
2	7	4	1	4	7	5	3	6	2
8	4	5	5	3	3	6	8	4	1
2	6	7	1	4	5	8	5	1	6
5	2	7	6	5	5	2	8	7	5
4	4	4	7	3	2	5	4	3	7
3	8	5	4	3	5	6	4	5	4
6	5	3	1	9	1	2	8	6	1

Put a loop around any three numbers that add up to 12.  
 You can find these numbers up, down, backwards, forwards or diagonally.

There are 45 different answers.

Who am I ?

I am on the number line,  
 I am more than  $\frac{1}{2}$  but less than  $\frac{3}{4}$ ,  
 Halfway between them you will find me.

Puzzle

If four straight lines are drawn on a sheet of paper, find the greatest number of times that they can cross.

NAME:

CLASS:



**Week 4**

Monday: Look at each list word in the diary. Copy it here. Check. Is it correct?	Tuesday: Look at each list word in the diary. Copy it here. Check.	Wednesday: Look at each list word in the diary. Copy it here. Check.	Thursday: Look at each list word in the diary. Copy it here. Check.

**Underline all the verbs. Include the helpers.**

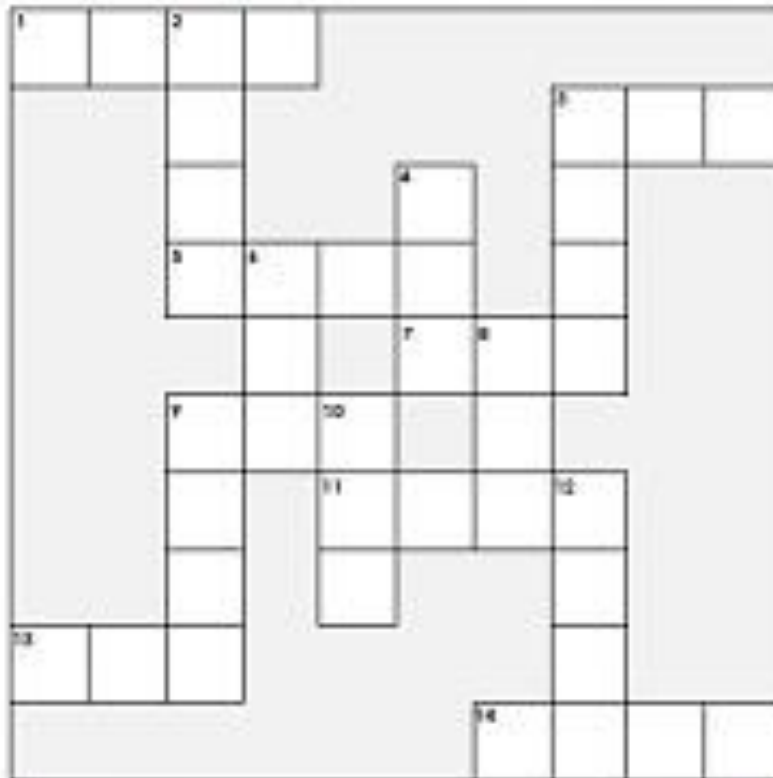
**This term we will be going on an excursion.  
After the bell goes, we all have to return to the classroom.  
Miss Cole is very busy writing reports.  
Where will the children be after lunch?  
Guy Fawkes Day was celebrated on November 5<sup>th</sup>.  
What happened on January 26<sup>th</sup> 1788?**

**Underline the subject of the sentence.**

**When the rain stops, we will be playing in the puddles.  
My mum and dad are working in the garden.  
Yesterday, the streets were very busy with shoppers.  
Have you seen my friend, James?**

Name: \_\_\_\_\_

## Division Math Crossword



### ACROSS

1.  $3 \overline{) 7,542}$

9.  $9 \overline{) 2,772}$

3.  $7 \overline{) 2,247}$

11.  $6 \overline{) 6,384}$

5.  $3 \overline{) 6,615}$

13.  $8 \overline{) 5,048}$

7.  $8 \overline{) 7,976}$

14.  $4 \overline{) 7,380}$

### DOWN

2.  $5 \overline{) 9,310}$

8.  $2 \overline{) 1,932}$

3.  $3 \overline{) 9,291}$

9.  $2 \overline{) 7,142}$

4.  $5 \overline{) 4,295}$

10.  $8 \overline{) 6,544}$

6.  $9 \overline{) 2,160}$

12.  $2 \overline{) 8,016}$

## Reading Record: Week 5 and Week 6

<b>Week 1.</b>	<b>Title</b>	<b>Pages</b>	<b>Parent initials</b>
<b>Monday</b>			
<b>Tuesday</b>			
<b>Wednesday</b>			
<b>Thursday</b>			

<b>Week 2.</b>	<b>Title</b>	<b>Pages</b>	<b>Parent initials</b>
<b>Monday</b>			
<b>Tuesday</b>			
<b>Wednesday</b>			
<b>Thursday</b>			

## Week 5

Monday: Look at each list word in the diary. Copy it here. Check. Is it correct?	Tuesday: Look at each list word in the diary. Copy it here. Check.	Wednesday: Look at each list word in the diary. Copy it here. Check.	Thursday: Look at each list word in the diary. Copy it here. Check.

Think about the traditions your family has at Christmas. What is it that you **ALWAYS** do... every year?

Write them down here.

---


---

---

---

---

---





## Draw Me!

Plot the coordinates below to reveal who I am.

### Step 1 - The Outline of my Face.

Plot these coordinates in order and then join the dots. Plot the coordinates from left to right.

(10,6)	(10,12)	(8,13)	(7,15)	(7,17)	(8,18)
(0,42)	(4,40)	(4,44)	(7,42)	(7,45)	(10,44)
(10,47)	(13,45)	(13,48)	(16,46)	(17,49)	(19,46)
(20,49)	(22,46)	(23,50)	(24,46)	(30,34)	(30,32)
(32,24)	(33,21)	(35,18)	(35,16)	(34,14)	(32,13)
(23,12)	(26,12)	(24,9)	(25,7)	(24,6)	(22,5)
(22,3)	(20,2)	(18,2)	(16,2)	(14,3)	(12,4)

### Step 2 - My Mouth.

(26,12)	(22,12)	(18,13)	(16,13)	(14,12)	(14,10)
(16,8)	(20,6)	(24,7)	(22,10)	(24,12)	

### Step 3 - My Tongue.

(20,6)	(20,8)	(22,9)	(20,11)	(19,10)	(18,11)
(17,11)	(16,10)	(16,8)			

### Step 4 - My Nose.

(29,22)	(30,21)	(31,20)	(31,19)	(31,17)	(30,16)
(28,16)	(26,17)	(25,19)			

### Step 5 - My Eyes.

Draw 2 circles centred at the points (19,24) and (28,28).

# WHO AM I?

**Week 6**

Monday: Look at each list word in the diary. Copy it here. Check. Is it correct?	Tuesday: Look at each list word in the diary. Copy it here. Check.	Wednesday: Look at each list word in the diary. Copy it here. Check.	Thursday: Look at each list word in the diary. Copy it here. Check.

**General Knowledge:**

**What is the highest mountain in the world?**

**What is the capital city of Cambodia?**

**What is the capital city of Kenya?**

**What is the currency of Japan?**

**What are the colours of the flag of Bangladesh?**

**What is the longest river in Africa?**

**In what direction is France from Hungary?**

**Which has the greater population China or India?**

**Which grain is the single most important source of calories for humans?**

Name: \_\_\_\_\_

Class: \_\_\_\_\_

# DIVISION

1  $9 \div 3 =$  1 2 3 5 10 20 40 50

2  $32 \div 8 =$  1 2 3 5 10 20 40 50

3  $8 \div 2 =$  1 2 3 5 10 20 40 50

4  $30 \div 5 =$  1 2 3 5 10 20 40 50

5  $15 \div 5 =$  1 2 3 5 10 20 40 50

6  $14 \div 7 =$  1 2 3 5 10 20 40 50

7  $42 \div 6 =$  1 2 3 5 10 20 40 50

8  $72 \div 8 =$  1 2 3 5 10 20 40 50

9  $56 \div 7 =$  1 2 3 5 10 20 40 50

10  $90 \div 10 =$  1 2 3 5 10 20 40 50

11  $8 \div 1 =$  1 2 3 5 10 20 40 50

12  $28 \div 7 =$  1 2 3 5 10 20 40 50

13  $36 \div 6 =$  1 2 3 5 10 20 40 50

14  $12 \div 4 =$  1 2 3 5 10 20 40 50

15  $24 \div 6 =$  1 2 3 5 10 20 40 50

16  $21 \div 3 =$  1 2 3 5 10 20 40 50

17  $36 \div 9 =$  1 2 3 5 10 20 40 50

18  $27 \div 9 =$  1 2 3 5 10 20 40 50

19  $12 \div 2 =$  1 2 3 5 10 20 40 50

20  $25 \div 5 =$  1 2 3 5 10 20 40 50

21  $16 \div 4 =$  1 2 3 5 10 20 40 50

22  $30 \div 6 =$  1 2 3 5 10 20 40 50

23  $45 \div 9 =$  1 2 3 5 10 20 40 50

24  $49 \div 7 =$  1 2 3 5 10 20 40 50

25  $6 \div 2 =$  1 2 3 5 10 20 40 50

26  $42 \div 7 =$  1 2 3 5 10 20 40 50

27  $48 \div 6 =$  1 2 3 5 10 20 40 50

28  $35 \div 7 =$  1 2 3 5 10 20 40 50

29  $10 \div 2 =$  1 2 3 5 10 20 40 50

30  $18 \div 9 =$  1 2 3 5 10 20 40 50

31  $4 \div 2 =$  1 2 3 5 10 20 40 50

32  $32 \div 4 =$  1 2 3 5 10 20 40 50

33  $40 \div 8 =$  1 2 3 5 10 20 40 50

34  $20 \div 4 =$  1 2 3 5 10 20 40 50

35  $54 \div 6 =$  1 2 3 5 10 20 40 50

36  $64 \div 8 =$  1 2 3 5 10 20 40 50

37  $16 \div 2 =$  1 2 3 5 10 20 40 50

38  $18 \div 6 =$  1 2 3 5 10 20 40 50

39  $12 \div 3 =$  1 2 3 5 10 20 40 50

40  $63 \div 7 =$  1 2 3 5 10 20 40 50

Solve the sums by colouring the numbered squares to total the answer.  
e.g.  $28 \div 7 = 4$  so the squares in the answer block containing 3 and 1 would be coloured.

1 2 3 5 10 20 40 50



## Reading Record: Week 7 and Week 8

<b>Week 1.</b>	<b>Title</b>	<b>Pages</b>	<b>Parent initials</b>
<b>Monday</b>			
<b>Tuesday</b>			
<b>Wednesday</b>			
<b>Thursday</b>			

<b>Week 2.</b>	<b>Title</b>	<b>Pages</b>	<b>Parent initials</b>
<b>Monday</b>			
<b>Tuesday</b>			
<b>Wednesday</b>			
<b>Thursday</b>			



Express decimals as fractions

22.N.1.1

Express the **decimals** as fractions or mixed numbers in lowest terms.  
Use the matching letters to answer the riddles.

What did one maths book say to the other?

	A		
$3\frac{25}{100}$	$3\frac{1}{2}$	$4\frac{1}{8}$	$\frac{1}{20}$

$2\frac{88}{100}$	$4\frac{1}{2}$	$3\frac{3}{25}$	$2\frac{2}{25}$

$\frac{7}{8}$	$\frac{98}{100}$	$3\frac{1}{4}$	$2\frac{22}{100}$	$4\frac{13}{100}$	$1\frac{1}{2}$	$1\frac{17}{25}$	$3\frac{1}{10}$

- A  $3.25 = 3\frac{25}{100} = 3\frac{1}{4}$
- B  $2.23 = \dots = \dots$
- E  $1.5 = \dots = \dots$
- G  $4.6 = \dots = \dots$
- H  $3.57 = \dots = \dots$
- I  $2.99 = \dots = \dots$

- O  $3.75 = \dots = \dots$
- V  $4.8 = \dots = \dots$
- E  $0.35 = \dots = \dots$
- L  $4.52 = \dots = \dots$
- M  $1.68 = \dots = \dots$

- O  $3.24 = \dots = \dots$
- P  $0.7 = \dots = \dots$
- R  $0.98 = \dots = \dots$
- S  $3.05 = \dots = \dots$
- T  $2.08 = \dots = \dots$

Why do hens always lay their eggs in the daytime?

$1\frac{1}{8}$	$1\frac{1}{4}$	$6\frac{22}{100}$	$2\frac{6}{25}$	$2\frac{21}{25}$	$2\frac{22}{100}$	$2\frac{15}{100}$

T			
$3\frac{29}{100}$	$9\frac{14}{25}$	$\frac{1}{10}$	$4\frac{7}{10}$

$4\frac{3}{25}$	$5\frac{13}{25}$	$\frac{1}{10}$	$5\frac{17}{25}$	$\frac{9}{10}$	$1\frac{17}{25}$

$2\frac{4}{25}$	$5\frac{27}{100}$	$2\frac{3}{25}$	$\frac{1}{8}$	$1\frac{88}{100}$	$3\frac{3}{10}$	$7\frac{3}{10}$	$8\frac{51}{100}$

$1\frac{3}{10}$	$3\frac{27}{100}$

$6\frac{56}{100}$	$3\frac{1}{20}$	$9\frac{6}{25}$	$5\frac{17}{25}$	$2\frac{97}{100}$



- T  $3.58 = 3\frac{58}{100} = 3\frac{29}{50}$
- A  $2.24 = \dots = \dots$
- B  $1.32 = \dots = \dots$
- C  $6.57 = \dots = \dots$
- E  $1.25 = \dots = \dots$
- R  $7.3 = \dots = \dots$
- G  $9.24 = \dots = \dots$
- H  $5.68 = \dots = \dots$
- N  $6.59 = \dots = \dots$
- E  $0.3 = \dots = \dots$
- O  $5.37 = \dots = \dots$

- R  $2.16 = \dots = \dots$
- E  $1.68 = \dots = \dots$
- S  $0.2 = \dots = \dots$
- T  $1.59 = \dots = \dots$
- Y  $4.35 = \dots = \dots$
- A  $1.06 = \dots = \dots$
- B  $4.36 = \dots = \dots$
- T  $2.87 = \dots = \dots$
- C  $0.01 = \dots = \dots$
- E  $5.26 = \dots = \dots$
- I  $3.05 = \dots = \dots$

- U  $2.62 = \dots = \dots$
- M  $0.09 = \dots = \dots$
- O  $2.15 = \dots = \dots$
- E  $3.9 = \dots = \dots$
- H  $9.56 = \dots = \dots$
- S  $2.83 = \dots = \dots$
- O  $5.85 = \dots = \dots$
- E  $2.13 = \dots = \dots$
- T  $3.27 = \dots = \dots$
- S  $8.51 = \dots = \dots$

## Week 8

Monday: Look at each list word in the diary. Copy it here. Check. Is it correct?	Tuesday: Look at each list word in the diary. Copy it here. Check.	Wednesday: Look at each list word in the diary. Copy it here. Check.	Thursday: Look at each list word in the diary. Copy it here. Check.

Now, write each word in a sentence. Use the word in correct context, demonstrating that you know its meaning and how to use it correctly. Underline the word in red.


1. What's the name of the period leading up to Christmas?
2. How many Wise Men brought gifts to Jesus?
3. How does Good King Wenceslas like his pizzas?
4. What was the name of John the Baptist's Mother?
5. Who brings presents to children in Holland on the 5th/6th December?
6. How many letters are in the angelic alphabet?
7. In what town was Jesus born?
8. How many presents were given in total in the 12 Days of Christmas?
9. In what decade was the first Christmas Card sent in the UK?
10. What country did the family escape to?
11. How many of Rudolph's eight companions names start with 'D'?
12. What country did Christmas Trees originate from?
13. Who was the 'King of the Jews' who ordered the babies to be killed?
14. What's the second line of "I'm dreaming of a white christmas"?
15. What was Joseph's job?
16. Who started the custom of Wassailing?
17. Who were first people to visit the baby Jesus?
18. What's lucky to find in your Christmas Pudding?
19. What Angel visited Mary?
20. Where did the baby Jesus sleep?



Reflection Questions about your Year Five year 2017. Write in your neatest writing.

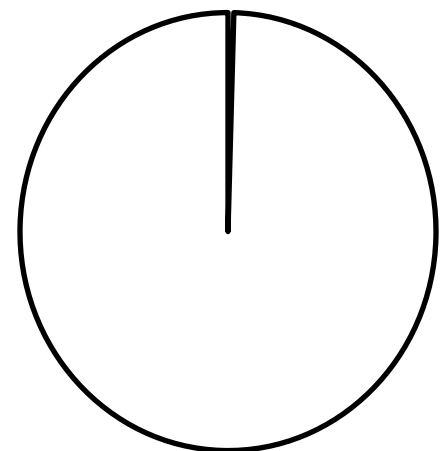
1. What is something we did this year that you think you will remember for the rest of your life?
2. What is something you accomplished this year that you are proud of?
3. What was the nicest thing someone in our class did for you this year?
4. What was the most challenging part of this year for you?
5. Where is your favourite place in our classroom (or school)? Why?
6. If you could change one thing that happened this year, what would it be?
7. What are three things you did this year to help your classmates?
8. What are the three most important things you learned this year?

9. What is something that was hard for you at the start of the year but is easy now?
10. In what area do you feel you made your biggest improvements?
11. What is your favourite part of the day in our class? Why?
12. What is something you taught your teacher or classmates this year?
13. Of the books you read this year, which was your favourite? Why?
14. What was the best piece of writing that you did this year? Why do you think it is your best?
15. What person at our school has made the biggest impact in your life this year? Why?
16. What is something the teacher could have done to make this year better?

17. What are six adjectives that best describe this school year?

18. Knowing what you know now, if you could write a letter to yourself that would travel back in time so that you would receive it at the start of the school year, what advice would you give your younger self?

19. How much of what you learned this year do you think will be useful to you? Show this on this pie diagram, where the whole circle is your whole life.



20. What advice would you give students who will be in this class next year?